
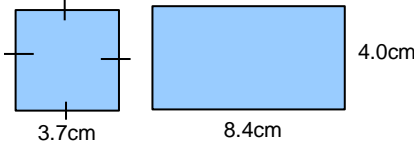

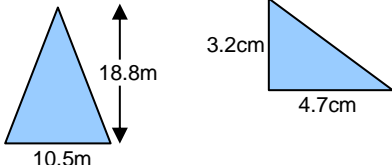

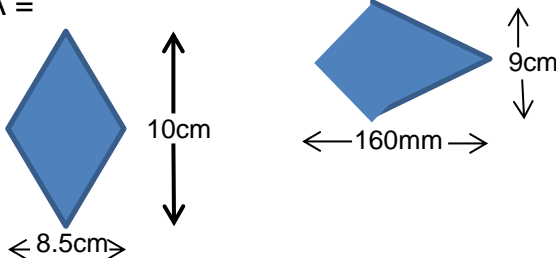

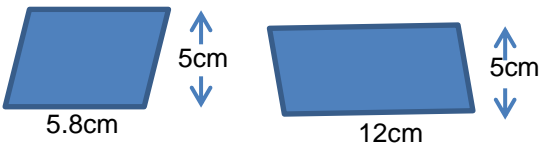

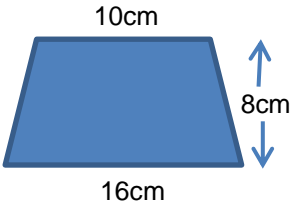

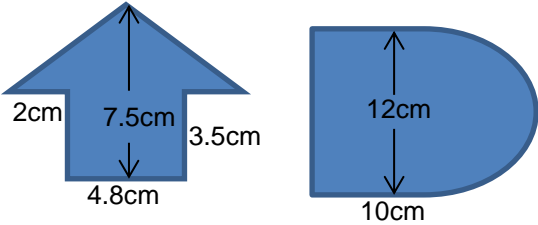



AREA of 2D SHAPES		
A: I can find areas of squares and rectangles		<p>Write the formula for calculating area for each 2D shape and find the area of each given shape.</p> <p>A =</p> 
B: I can find areas of triangles		<p>A =</p> 
C: I can find areas of kites and rhombuses		<p>A =</p> 
D: I can find areas of parallelograms		<p>A =</p> 
E: I can find the area of a trapezium		<p>A =</p> 
F: I can find the areas of composite shapes		
G: I can find the surface area of prisms		<p>Calculate the surface area of a cube of side 3cm.</p> <p>Calculate the surface area of a cuboid with sides 5cm, 6cm and 8cm.</p>